

Today is ____ th of March 2021.


6° semana

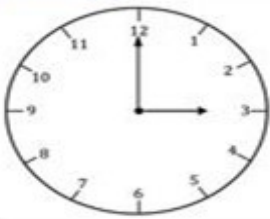
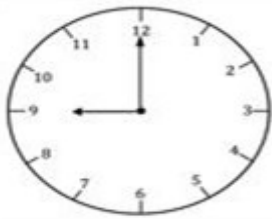
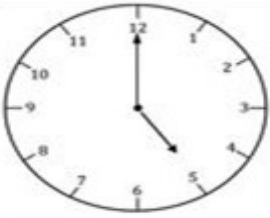







Teacher : Célia Monteiro

Grade: 5°. Ano _____

Student: _____

1- Pinte o quadro que indica a hora correta de cada relógio.

 Which Clock is it?

 5:00 12:00 3:00	 9:00 12:00 3:00
 5:00 12:00 3:00	 11:00 12:00 3:00
 5:00 6:00 3:00	 4:00 12:00 2:00
 8:00 12:00 3:00	 5:00 12:00 10:00
 5:00 12:00 4:00	 5:00 7:00 3:00

Color the correct time shown on the clock.

Observação:

- O ponteiro menor indica a hora e o ponteiro maior indica os minutos.
- Em inglês quando temos hora exata usamos a palavra O' CLOCK = HORA
- Exemplo 7:00 horas = Seven o' clock.